

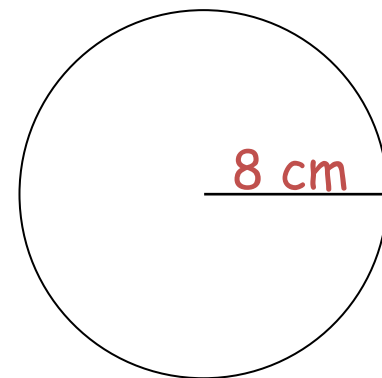
Find the circumference of the following circles.

$$C = \pi d$$

Or

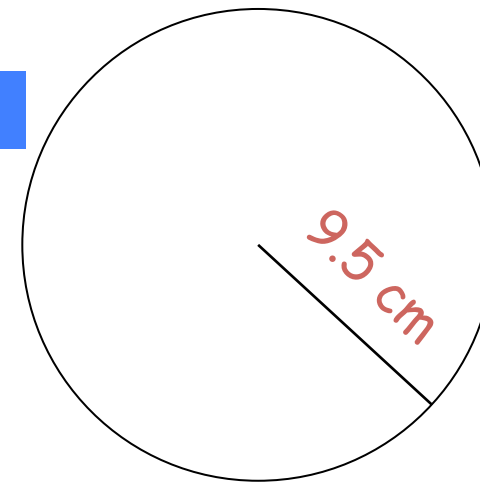
$$2\pi r$$

1



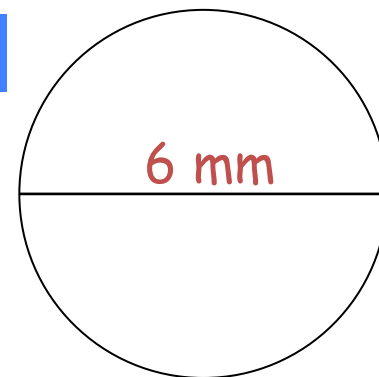
$$c = \underline{\hspace{2cm}} (1 \text{ dp})$$

2



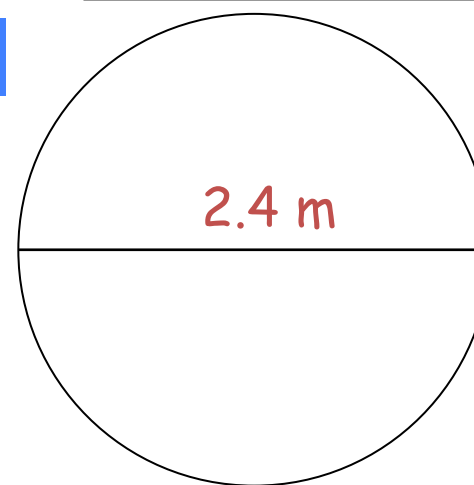
$$c = \underline{\hspace{2cm}} (1 \text{ dp})$$

3



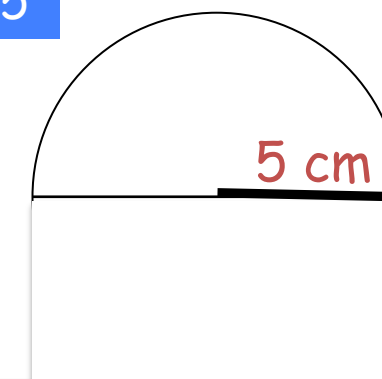
$$c = \underline{\hspace{2cm}} (1 \text{ dp})$$

4



$$c = \underline{\hspace{2cm}} (1 \text{ dp})$$

5



$$c = \underline{\hspace{2cm}} (1 \text{ dp})$$